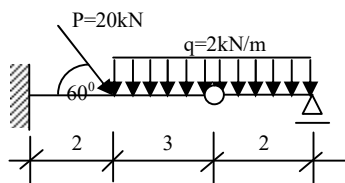


MECHANIKA OGÓLNA - LISTA ZADAŃ 4

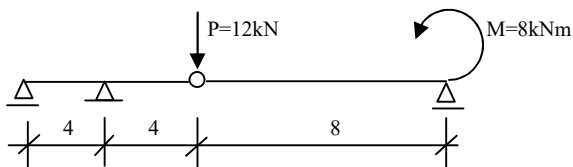
D. OBLICZANIE REAKCJI. BELKI PRZEGUBOWE. RAMY TRÓJPRZEGUBOWE.

Polecenie dla wszystkich zadań: oblicz reakcje podporowe w przedstawionych belkach, ramach. Wymiary na rysunkach podano w metrach.

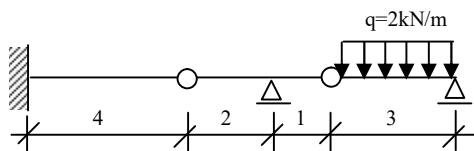
Zad. 1D



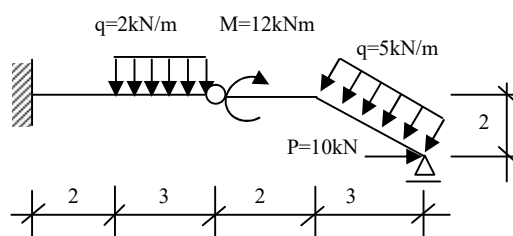
Zad. 2D



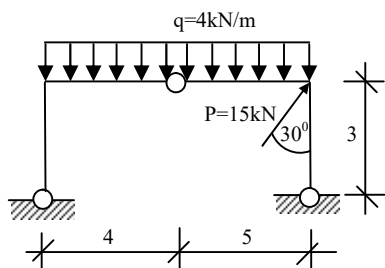
Zad. 3D



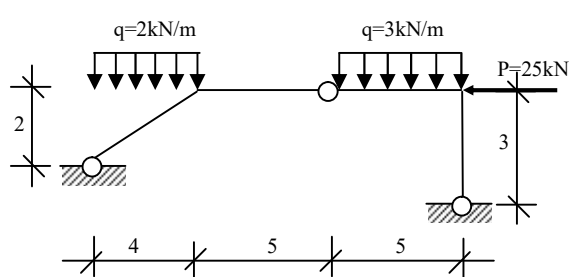
Zad. 4D



Zad. 5D



Zad. 6D



Zad. 7D

